



INDIAN SCHOOL AL WADI AL KABIR
DEPARTMENT OF MATHEMATICS (2025 – 2026)

TOPIC: MEASUREMENT

Worksheet 1

RESOURCE PERSON: Ms. VANESSA TRAVAS

NAME: _____ CLASS: II SEC: _____ DATE: _____

Q1. Match the given objects in column A to their respective lengths in column B.
Use the blanks provided below.

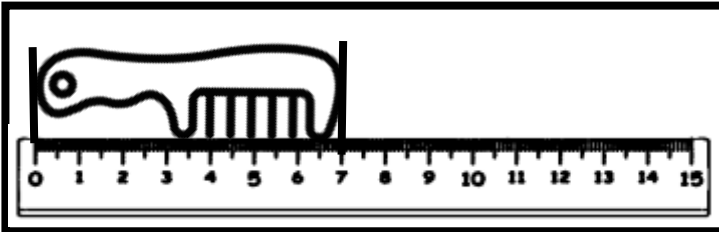


Scan here for a
video

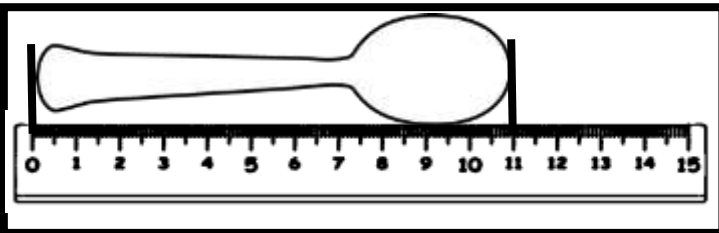


A

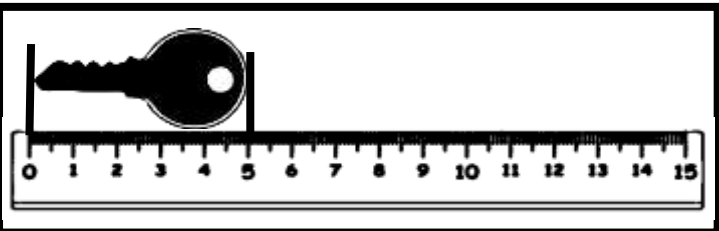
a)



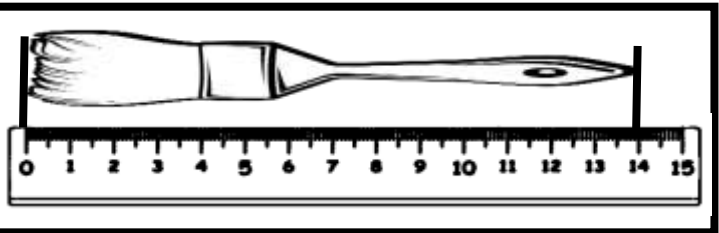
b)



c)



d)



B

1)

14 cm

2)

5 cm

3)

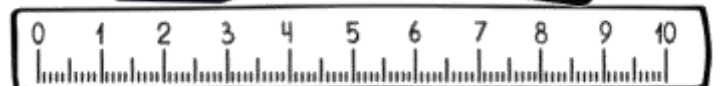


7 cm

4)

11 cm

a) _____ b) _____ c) _____ d) _____

Q2. Tick the box where the brush is placed correctly for measurement.




Q3. Write the unit of measurement you will use to measure the following. Remember to write the full form.



Height of a building



Distance from Muscat to sohar




Length of a pen




Length of a saree

Q4. Measure the height of Ziggy, Zaggy and Zoggy using a ruler and then answer the following questions.




Ziggy

_____ centimetres



Zaggy

_____ centimetres



Zoggy

_____ centimetres



Q1. Who is the tallest of the three? _____

Q2. Who is shorter than Ziggy? _____

Q3. Write their heights in descending order. (Remember to write the units of measurement.)



INDIAN SCHOOL AL WADI AL KABIR
DEPARTMENT OF MATHEMATICS (2025 – 2026)

TOPIC: MEASUREMENT

Worksheet 1

RESOURCE PERSON: Ms. VANESSA TRAVAS

(Answer Keys)

NAME: _____ CLASS: II SEC: _____ DATE: _____

Q1. Match the given objects in column A to their respective lengths in column B.

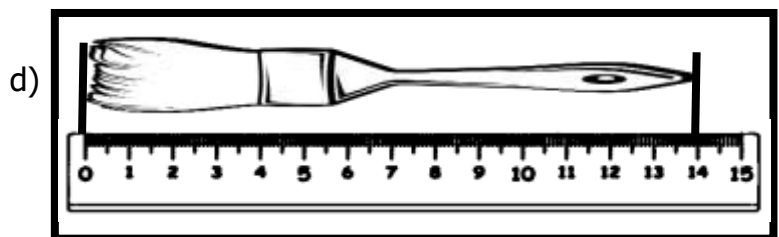
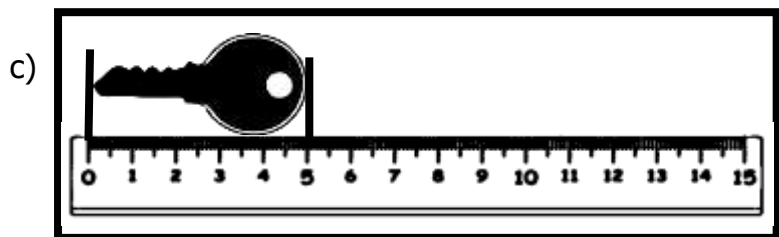
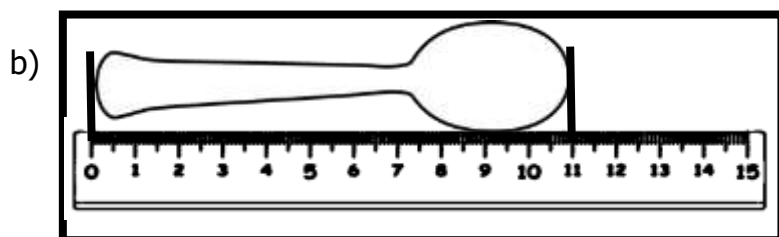
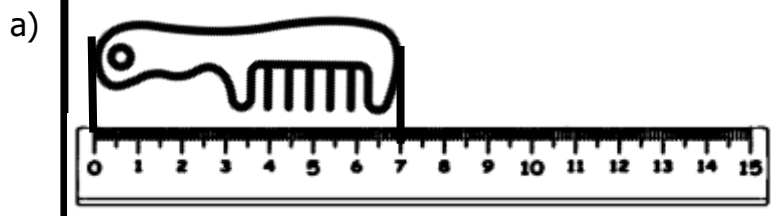


Scan here for a video



A

B



1) 14 cm

2) 5 cm

3) 7 cm

4) 11 cm

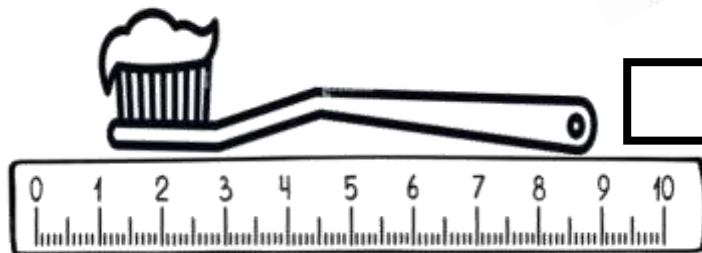
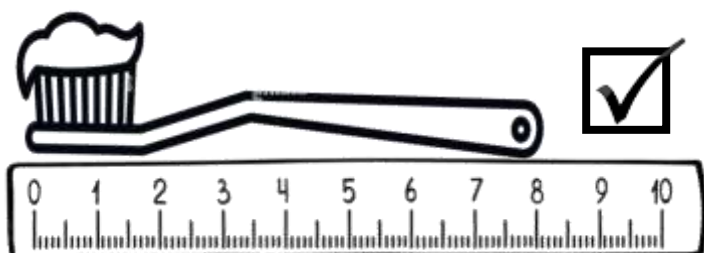
a) 3

b) 4

c) 2

d) 1

Q2. Tick the box where the brush is placed correctly for measurement.



Q3. Write the unit of measurement you will use to measure the following. Remember to write the full form.




Height of a building

metres



Distance from Muscat to sohar

kilometres



Length of a pen


centimetres



Length of a saree


metres

Q4. Measure the height of Ziggy, Zaggy and Zoggy using a ruler and then answer the following questions.




Ziggy

_____ centimetres



Zaggy

_____ centimetres



Zoggy

_____ centimetres



Q1. Who is the tallest of the three? Zaggy

Q2. Who is shorter than Ziggy? Zoggy

Q3. Write their heights in Descending order. (Remember to write the units of measurement.)
